


Place Value: Ones, Tens, and Hundreds

(page 1 of 2)

Math Words
• equal

10 singles equal 1 strip of ten




=




10 strips of ten

equal

1 sheet of one hundred.



=



Place Value: Ones, Tens, and Hundreds

(page 2 of 2)

Jessica and Carlos went to Sticker Station. They each bought 57 stickers.

Jessica bought 5 strips of ten and 7 single stickers.



Equation:
 $50 + 7 = 57$

Carlos bought 4 strips of ten and 17 single stickers.



Equation:
 $40 + 17 = 57$

1 strip of ten equals 10 singles.


Kevin and Mia went to Sticker Station. They each bought 128 stickers.

Kevin bought 1 sheet of one hundred, 2 strips of ten, and 8 single stickers.



Equation:
 $100 + 20 + 8 = 128$

Mia bought 12 strips of ten and 8 single stickers.



Equation:
 $120 + 8 = 128$

1 sheet of one hundred equals 10 strips of ten.



Suppose that you went to Sticker Station and also bought 128 stickers. What are some other ways you could buy 128 stickers?

SMH

8

eight