





# Place Value: Many Ways to Make 145

Four students went to Sticker Station. Each of them bought 145 stickers.

Student	Sheets of 100	Strips of 10	Singles	Equation
Gina bought these stickers. 	1	4	5	$100 + 40 + 5 = 145$
Adam bought these stickers. 	0	14	5	$0 + 140 + 5 = 145$
Denzel bought these stickers. 	0	13	15	$0 + 130 + 15 = 145$
Pilar bought these stickers. 	0	12	25	$0 + 120 + 25 = 145$



Suppose that you went to Sticker Station and also bought 145 stickers. What are some other ways you could buy 145 stickers?