

# Fractions of an Area


**Math Words**

- denominator
- numerator


Nancy, Murphy, Kelly, and Adam have one brownie to share equally.



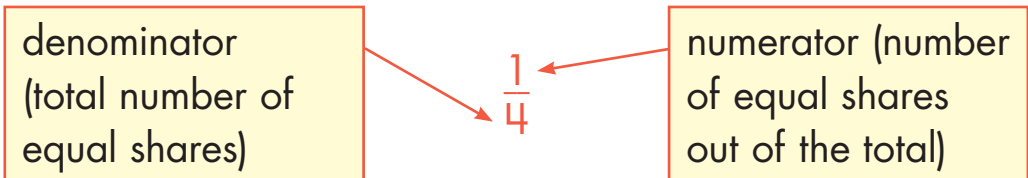
Nancy cut the brownie into four pieces. All of the pieces are the same size.



Each person gets  $\frac{1}{4}$  of the brownie.



## Fraction Notation:



Here are some other ways to cut one brownie into fourths.

