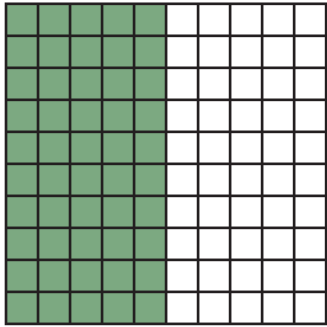


Tenths and Hundredths



How many tenths are shaded?

0.5 5 out of 10 columns are shaded.


How many hundredths are shaded?

0.50 50 out of 100 squares are shaded.

These decimals are equal: $0.5 = 0.50$

There are many ways to represent the same part of a whole with decimals and fractions.

$$0.5 = 0.50 = \frac{1}{2} = \frac{5}{10} = \frac{50}{100}$$




How many tenths are shaded?

0.2 2 out of 10 columns are shaded.

How many hundredths are shaded?

0.20 20 out of 100 squares are shaded.

$$0.2 = 0.20 = \frac{2}{10} = \frac{1}{5} = \frac{20}{100}$$



How many tenths are shaded?

How many hundredths are shaded?

What fractional part is shaded?